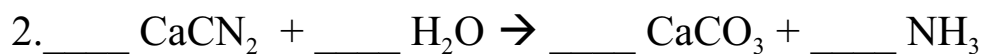
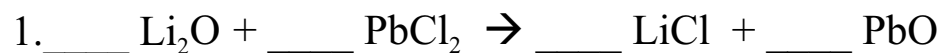


Name _____ Date _____ Period _____

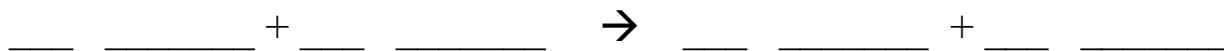
C405PAP Chemistry

Balancing Practice 3

Directions: Balance the following equations and you must show all of your work !



4. Propane, C_3H_8 , burns in air to form carbon dioxide and water.



5. Aluminum and hydrogen chloride react.

